



INDIAN SCHOOL AL WADI AL KABIR

DEPARTMENT OF EVS [2023 – 2024]

LESSON: **ANIMALS LIVING TOGETHER**

WORKSHEET - 2

RESOURCE PERSON: Ms. MIDHAT FATIMA

NAME: _____ CLASS: IV SEC: _____ DATE: _____

Q1. Fill in the blanks.

- Honey bees are _____ insects.
- Animals _____ and _____ in groups.
- The _____ and the _____ member of the group becomes the group leader among the wild animals.
- Honey bees _____ or _____ on flowers to get nectar.
- The young ones in the group are _____ in the ways of animal life.
- Honey bees have a long tube-like _____ that is used to insert into flowers to obtain nectar.





Q2. Match the column A to column B.

Column A	Column B
1. artificial bee hive	a. play and enjoy themselves in groups
2. cattle egret	b. sweet liquid produced by flowers
3. nectar	c. used in an apiary for rearing honey bees
4. young animals	d. feeds on ticks and leech found on the back of other animals
1 – _____	2 – _____
3 – _____	4 - _____

Q3. State whether the statements are true or false.


- The rearing of honey bees on large scale is called agriculture. _____
- Honey is used in making medicines for cough and cold. _____
- Rabbit is a friendly animal. _____
- Pollination help plants to create new seeds that grow into new plants. _____
- Stingers are the tool of defence for the honeybees. _____
- The drone bee is the only male bee in the hive. _____
- A sucker fish helps in cleaning the mouth of the shark by eating the fragments stuck in its teeth.

Q4. Colour the pictures of the animals given below and name them. Also state the kind of animals they are - shy or friendly animals.

			
Name: _____ Kind: _____	Name: _____ Kind: _____	Name: _____ Kind: _____	Name: _____ Kind: _____

Q5. Observe the given pictures and fill in the blanks to complete the sentences based on your observation.

- 1a. The animal shown in the picture is _____. They move in groups in search of _____ and _____.
- b. When a member sees an _____, it warns other members about the _____. The group either _____ or _____ with the enemy.
- c. Animals feel _____ when they are in a group.



2.



- a. The picture given alongside shows an _____.
- b. It is used to obtain _____ made by honey bees.
- c. Define the terms.
- i. **Apiculture** – _____

- ii. **Apiary**- _____
